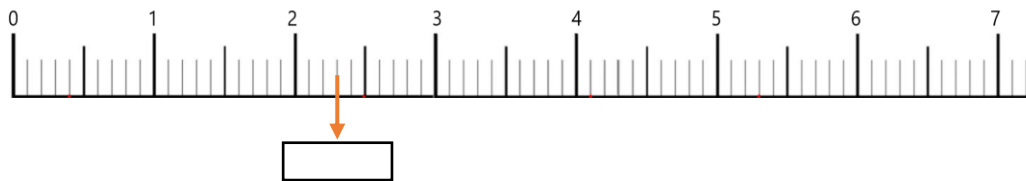


LES DROITES GRADUÉES

1



$$\frac{21}{10}$$

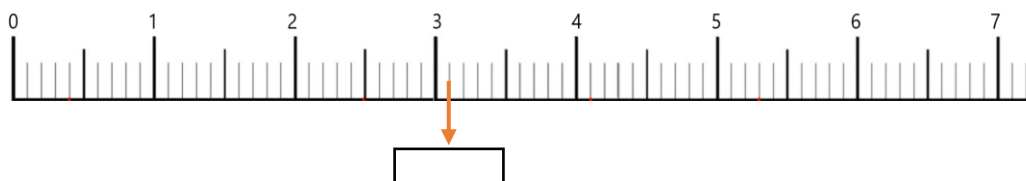
$$\frac{20}{10}$$

$$\frac{23}{10}$$

$$\frac{24}{10}$$

LES DROITES GRADUÉES

2



$$\frac{7}{10}$$

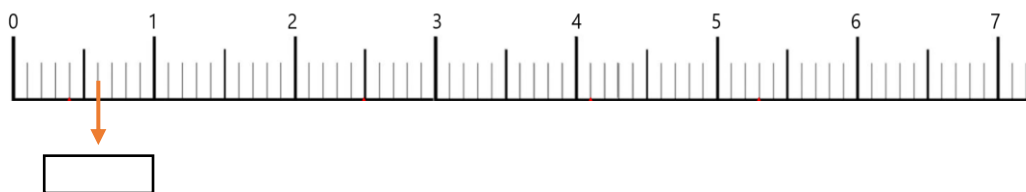
$$\frac{32}{10}$$

$$\frac{3}{10}$$

$$\frac{31}{10}$$

LES DROITES GRADUÉES

3



$$\frac{8}{10}$$

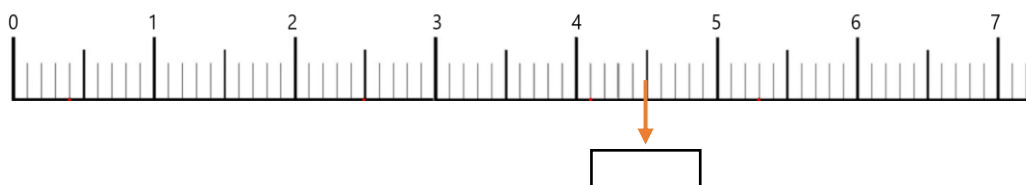
$$\frac{6}{10}$$

$$\frac{5}{10}$$

$$\frac{3}{10}$$

LES DROITES GRADUÉES

4



$$\frac{42}{10}$$

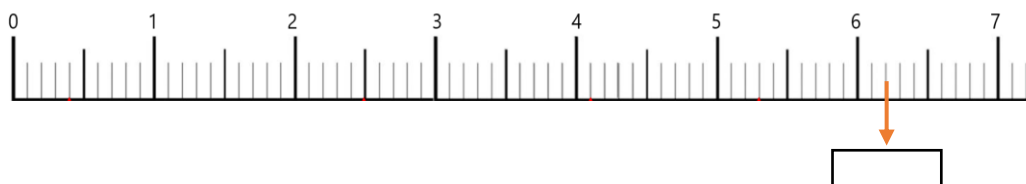
$$\frac{45}{10}$$

$$\frac{40}{10}$$

$$\frac{44}{10}$$

LES DROITES GRADUÉES

5



$$\frac{63}{10}$$

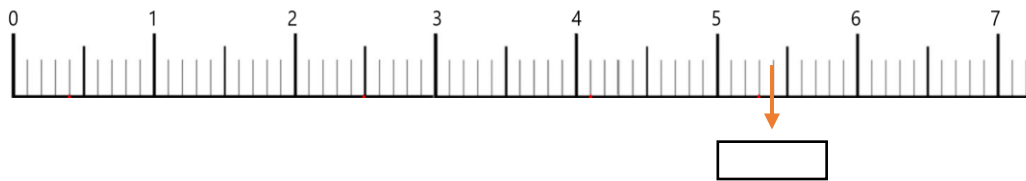
$$\frac{6}{10}$$

$$\frac{7}{10}$$

$$\frac{62}{10}$$

LES DROITES GRADUÉES

6



$$\frac{53}{10}$$

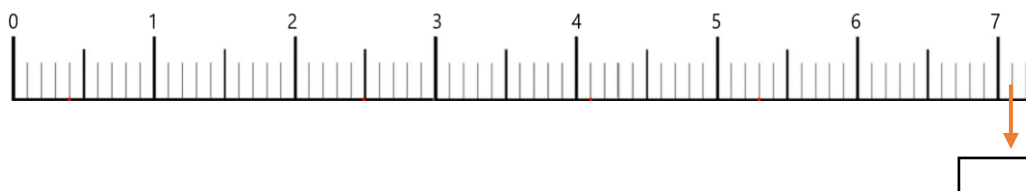
$$\frac{5}{10}$$

$$\frac{54}{10}$$

$$\frac{50}{10}$$

LES DROITES GRADUÉES

7



$$\frac{7}{10}$$

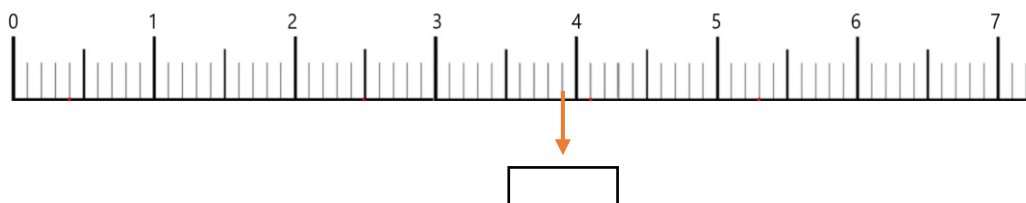
$$\frac{2}{10}$$

$$\frac{71}{10}$$

$$\frac{70}{10}$$

LES DROITES GRADUÉES

8



$$\frac{4}{10}$$

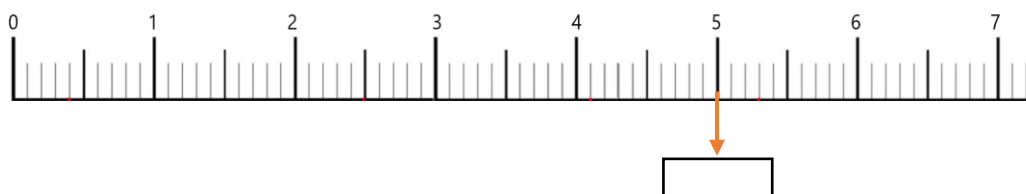
$$\frac{40}{10}$$

$$\frac{39}{10}$$

$$\frac{38}{10}$$

LES DROITES GRADUÉES

9



$$\frac{38}{10}$$

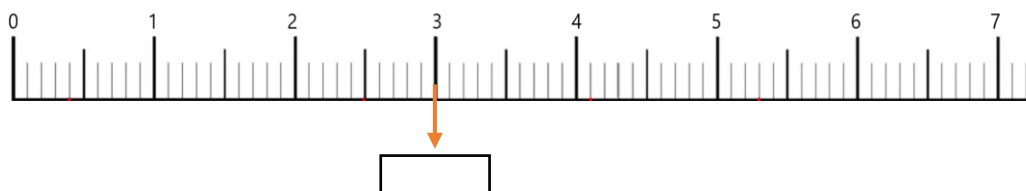
$$\frac{39}{10}$$

$$\frac{40}{10}$$

$$\frac{50}{10}$$

LES DROITES GRADUÉES

10



$$\frac{3}{10}$$

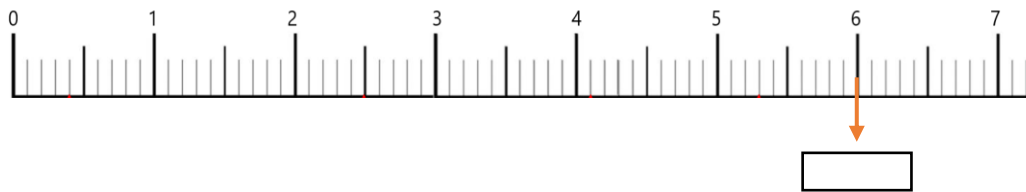
$$\frac{29}{10}$$

$$\frac{30}{10}$$

$$\frac{31}{10}$$

LES DROITES GRADUÉES

11



$$\frac{59}{10}$$

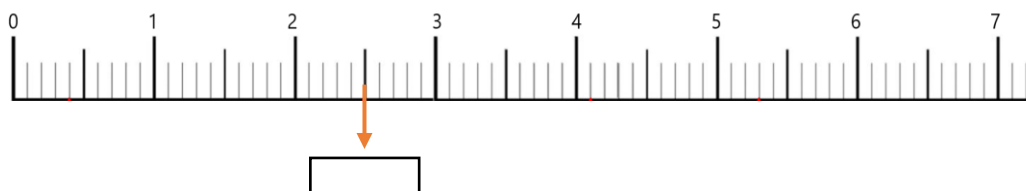
$$\frac{60}{10}$$

$$\frac{6}{10}$$

$$\frac{10}{10}$$

LES DROITES GRADUÉES

12



$$\frac{23}{10}$$

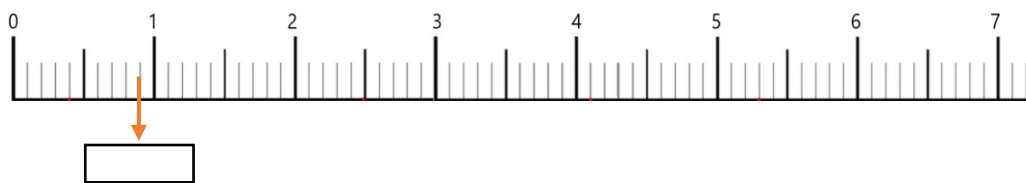
$$\frac{25}{10}$$

$$\frac{28}{10}$$

$$\frac{30}{10}$$

LES DROITES GRADUÉES

13



$$\frac{5}{10}$$

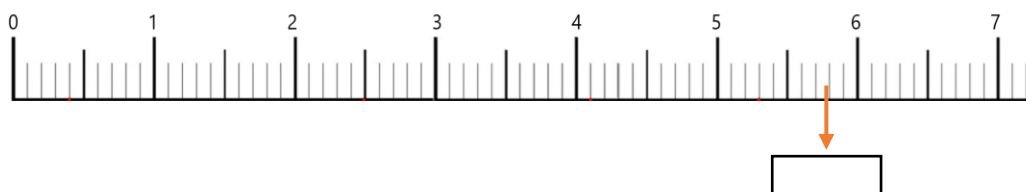
$$\frac{7}{10}$$

$$\frac{9}{10}$$

$$\frac{10}{10}$$

LES DROITES GRADUÉES

14



$$\frac{88}{10}$$

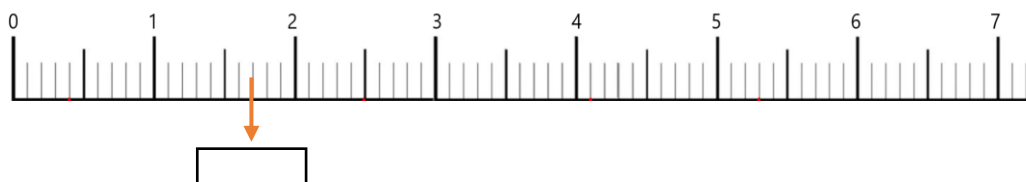
$$\frac{5}{10}$$

$$\frac{13}{10}$$

$$\frac{58}{10}$$

LES DROITES GRADUÉES

15



$$\frac{13}{10}$$

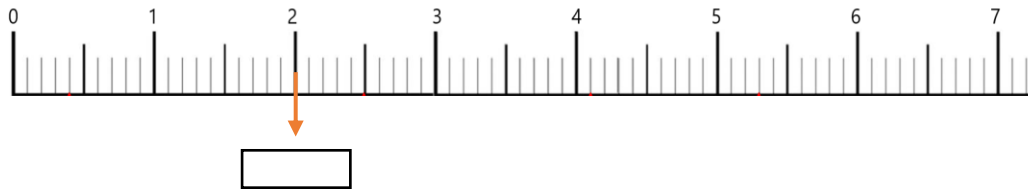
$$\frac{17}{10}$$

$$\frac{20}{10}$$

$$\frac{16}{10}$$

LES DROITES GRADUÉES

16



$$\frac{20}{10}$$

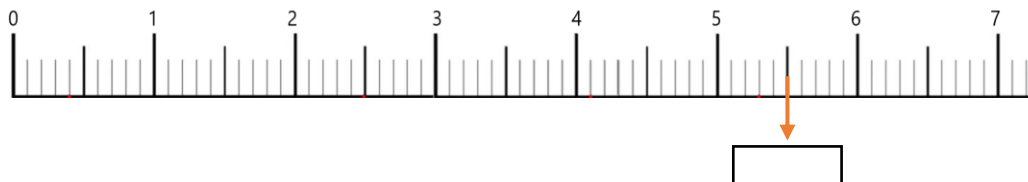
$$\frac{60}{10}$$

$$\frac{2}{10}$$

$$\frac{10}{10}$$

LES DROITES GRADUÉES

17



$$\frac{50}{10}$$

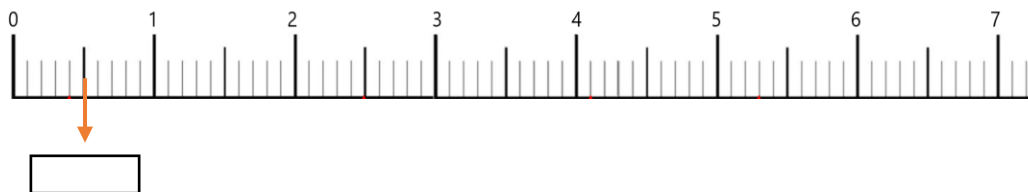
$$\frac{25}{10}$$

$$\frac{55}{10}$$

$$\frac{30}{10}$$

LES DROITES GRADUÉES

18



$$\frac{5}{10}$$

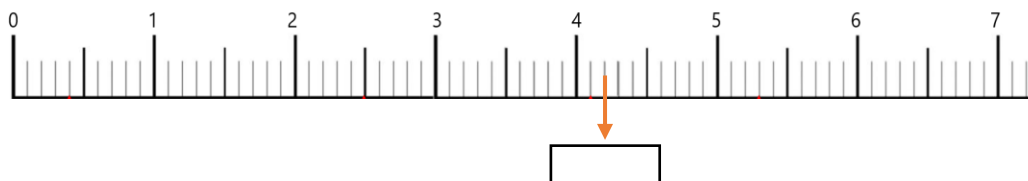
$$\frac{7}{10}$$

$$\frac{9}{10}$$

$$\frac{10}{10}$$

LES DROITES GRADUÉES

19



$$\frac{41}{10}$$

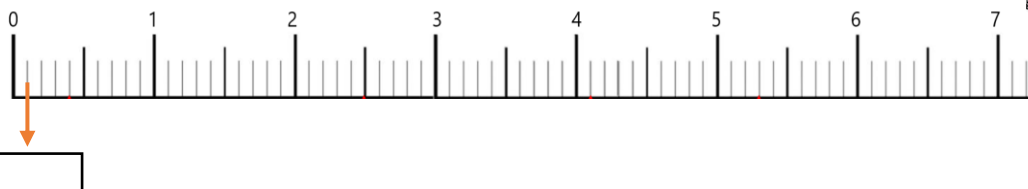
$$\frac{45}{10}$$

$$\frac{42}{10}$$

$$\frac{40}{10}$$

LES DROITES GRADUÉES

20



$$\frac{1}{10}$$

$$\frac{2}{10}$$

$$\frac{10}{10}$$

$$\frac{4}{10}$$